



UNIVERSITY OF CAMBRIDGE INTERNATIONAL EXAMINATIONS
General Certificate of Education Ordinary Level

CANDIDATE
NAME

CENTRE
NUMBER

--	--	--	--	--

CANDIDATE
NUMBER

--	--	--	--



PAKISTAN STUDIES

2059/02

Paper 2 The Environment of Pakistan

October/November 2011

1 hour 30 minutes

Candidates answer on the Question Paper.

No Additional Materials are required.

READ THESE INSTRUCTIONS FIRST

Write your Centre number, candidate number and name on all the work you hand in.

Write in dark blue or black pen.

Do not use staples, paper clips, highlighters, glue or correction fluid.

DO **NOT** WRITE IN ANY BARCODES.

Answer any **three** questions.

The insert contains Photograph A for Question 1 and Photograph B for Question 4.

The Insert is **not** required by the Examiner.

The number of marks is given in brackets [] at the end of each question or part question.

This document consists of **22** printed pages, **2** blank pages and **1** Insert.



(b) Study Fig. 1, which shows fish production in Pakistan.

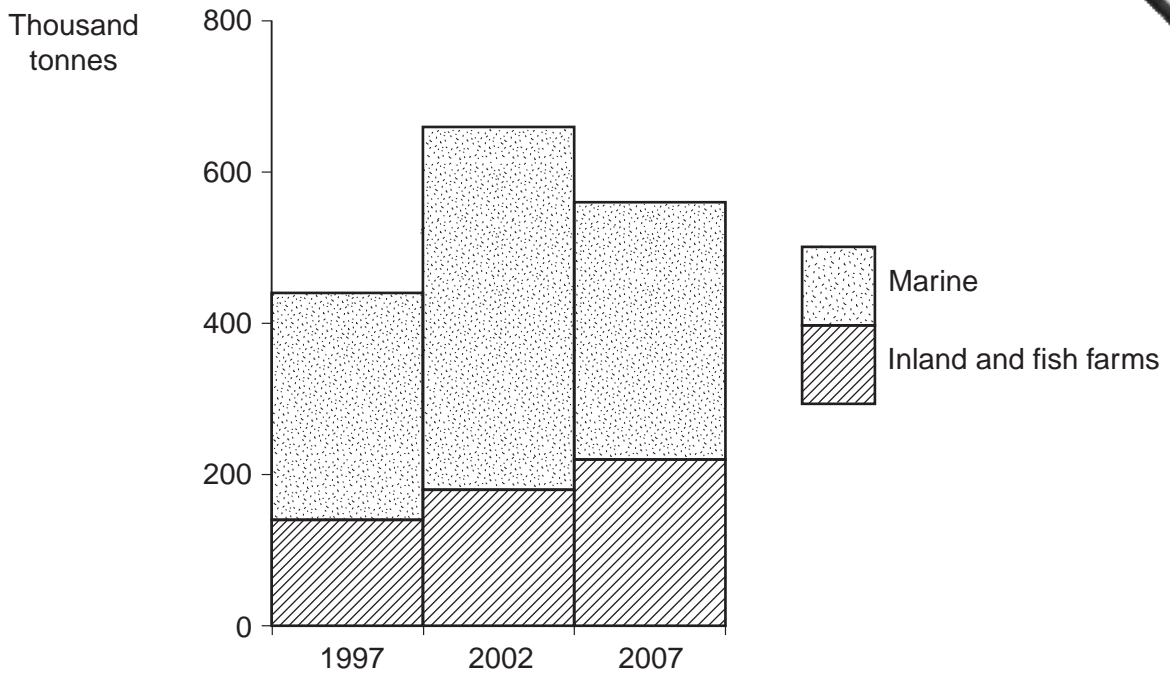


Fig. 1

(i) Which type of fishing increased from 1997 to 2007?

..... [1]

(ii) In which year was marine fish production lowest?

..... [1]

(iii) How did the overall total production change from 1997 to 2007?

.....
.....
.....
..... [2]

- (ii) At the present time, most of the fish catch is processed in Karachi. The ports of Balochistan such as Gwadar and Pasni have the potential for development.

What are the advantages and disadvantages of developing fish processing industries in the ports of Balochistan?

Advantages

.....
.....
.....
.....
.....
.....
.....
.....
.....

Disadvantages

.....
.....
.....
.....
.....
.....
.....
.....
.....

[6]

[Total: 25]

2 (a) Study Fig. 2, which shows cotton growing regions in Pakistan.

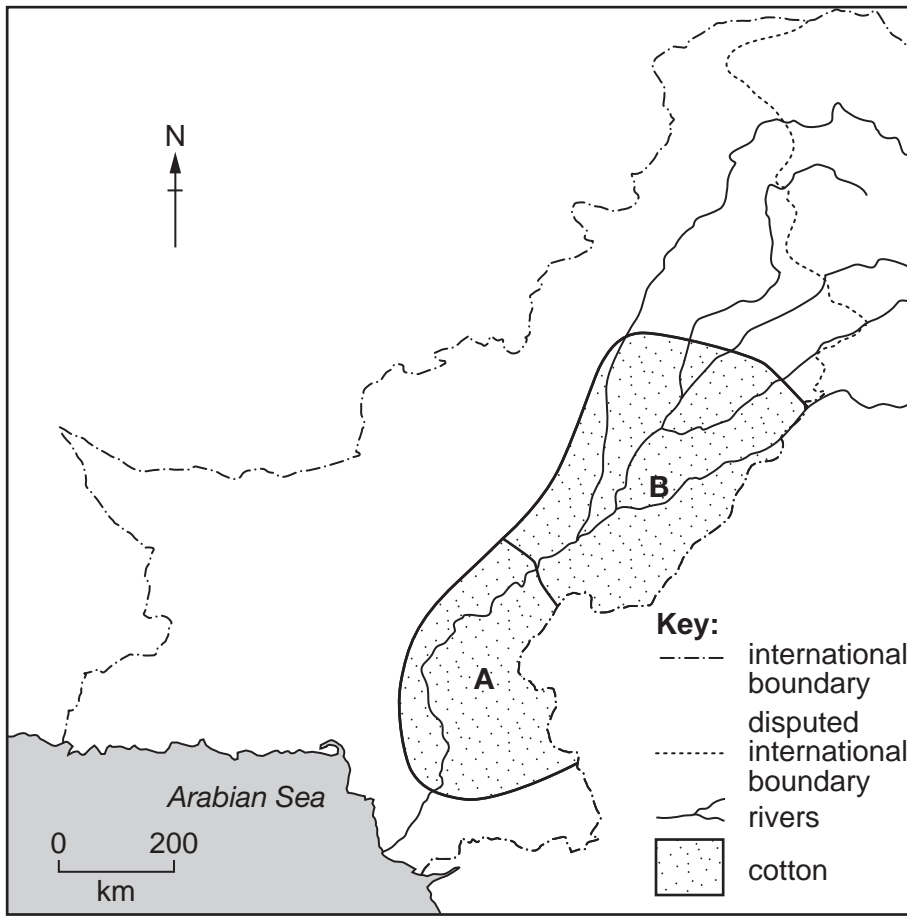


Fig. 2

(i) Name the regions A and B.

A
B [2]

(ii) Why is cotton not grown further north?

.....
.....
.....
..... [2]

(iii) Why is cotton not grown further west?

.....
.....
.....

(b) Study Fig. 3, a graph of cotton farming.

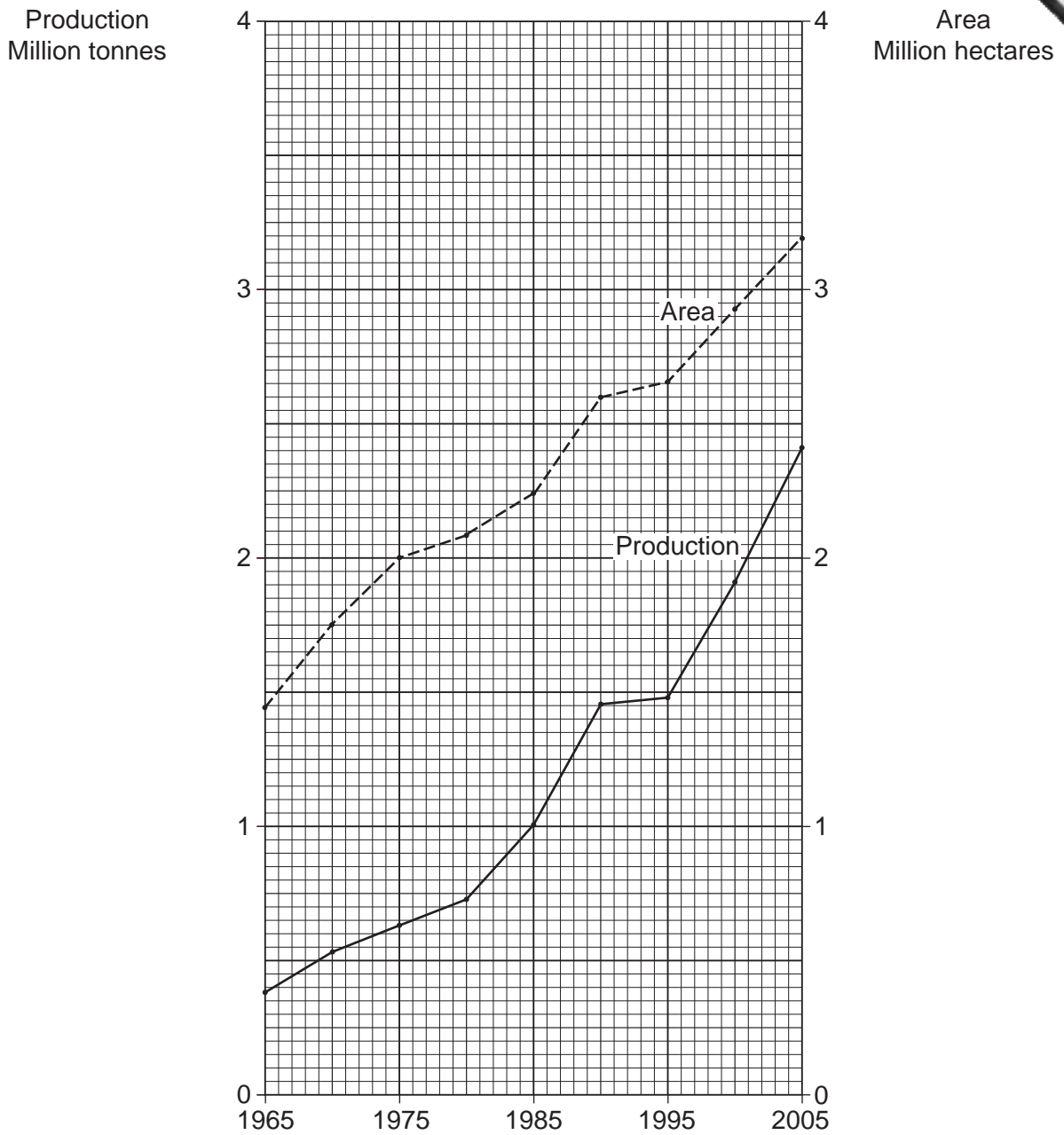


Fig. 3

(i) State the area used to grow cotton in 2005.

..... million hectares [1]

(ii) State the production in 2005.

..... million tonnes [1]

3 (a) Study Fig. 4.

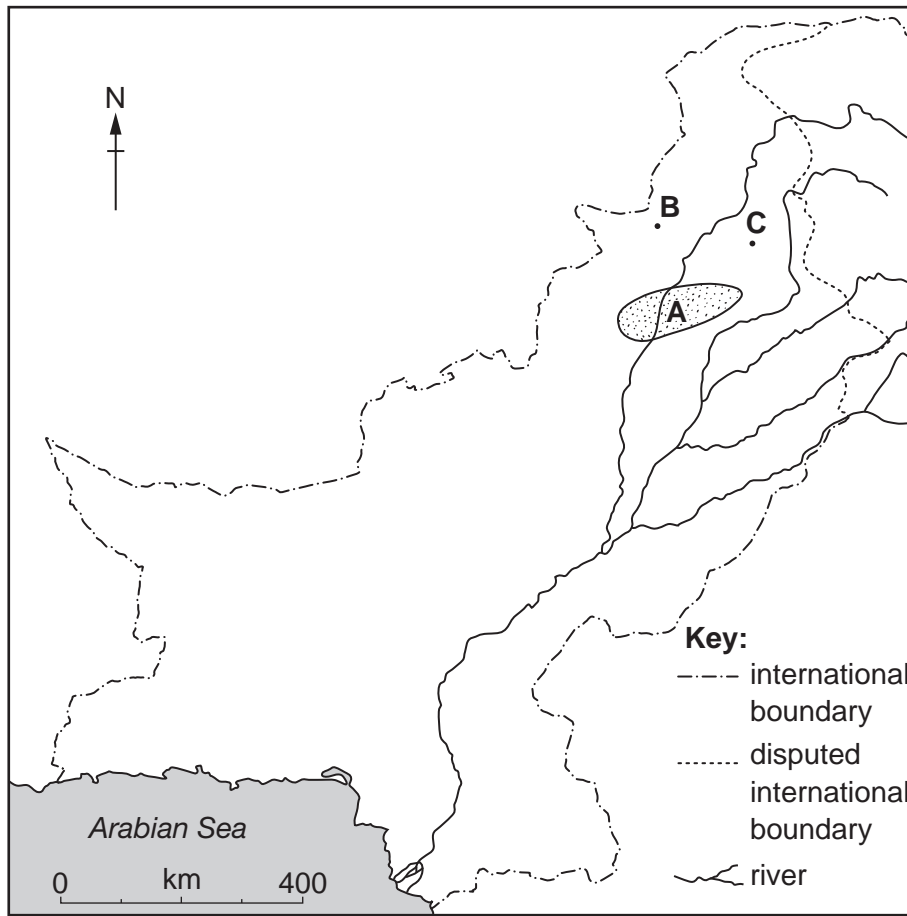


Fig. 4

(i) Name the area **A** which has many mineral resources.

.....[1]

(ii) Name **two** minerals that can be extracted in this area.

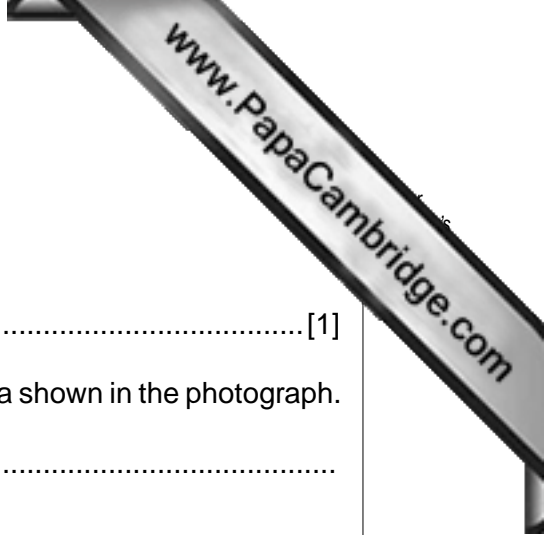
1

2[2]

(iii) Name the cities **B** and **C**.

B

C[2]



4 (a) Study Photograph B (Insert).

(i) What are the animals shown in the photograph?

..... [1]

(ii) Describe the topography (relief) and vegetation of the area shown in the photograph.

Topography (relief)

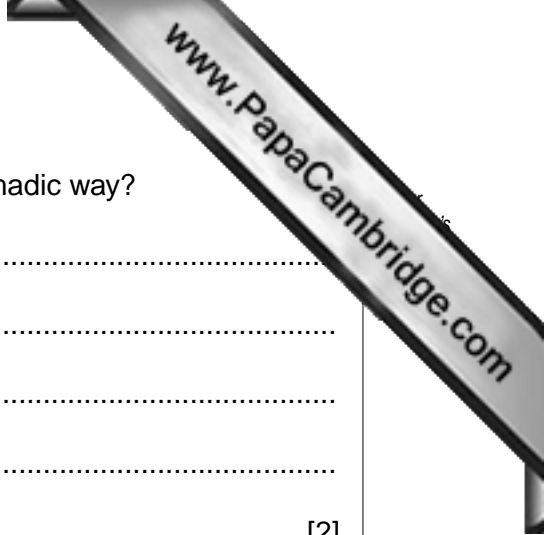
.....
.....
.....

Vegetation

.....
.....
..... [3]

(iii) Explain why these animals are reared in a nomadic way in arid areas.

.....
.....
.....
.....
.....
.....
.....
.....
..... [3]



(iv) What are the disadvantages of keeping animals in a nomadic way?

.....
.....
.....
.....
..... [2]

(v) Suggest an alternative way of keeping these animals.

..... [1]

(b) Study Fig. 7.

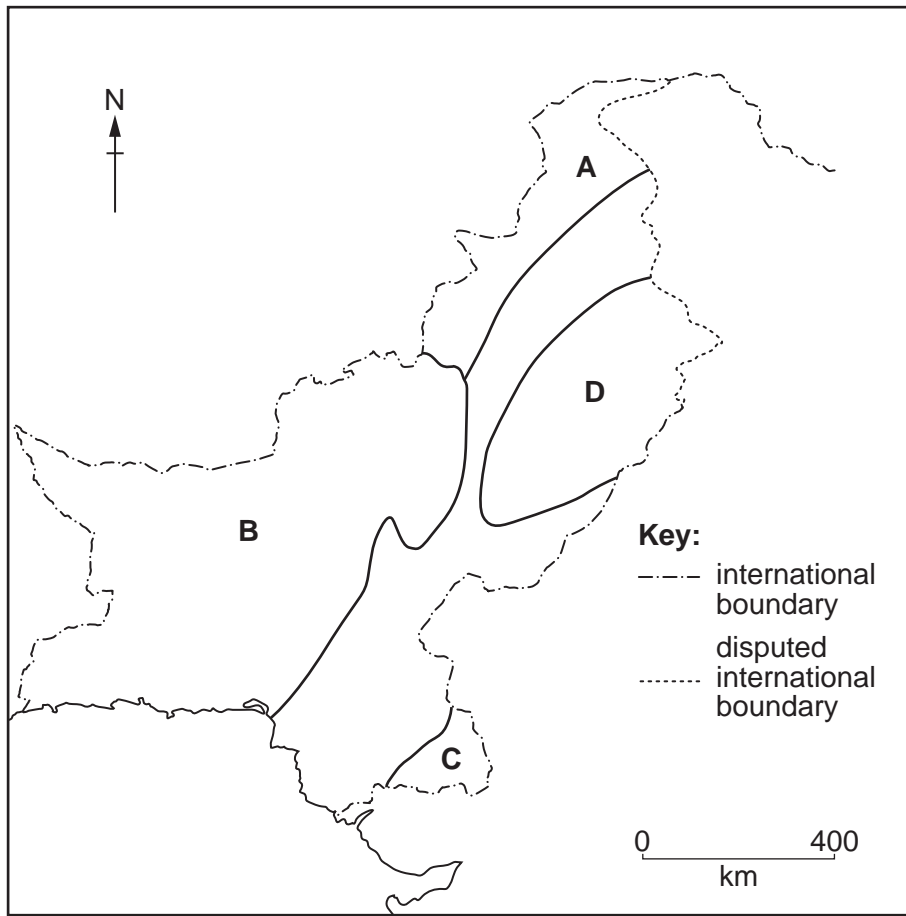


Fig. 7

(i) State **one** important **physical** reason for the **low** density of population in each of these areas:

A

B

C [3]



(ii) **RELIEF** **RAINFALL** **RIVERS**

Explain how **each** of the three factors above contributes to a **high** density of population in area **D**.

Relief

.....

.....

.....

.....

Rainfall

.....

.....

.....

.....

Rivers

.....

.....

.....

.....

[6]



(c) Choose **either** area **A** or area **B** from Fig. 7.

It is often suggested that improved transport and telecommunications can bring development to a sparsely populated area.

What are the advantages and disadvantages of these improvements to **either** area **A** or area **B**?

Advantages

.....
.....
.....
.....
.....
.....
.....
.....
.....
.....

Disadvantages

.....
.....
.....
.....
.....
.....
.....
.....
.....
.....

[6]

[Total: 25]

5 (a) Study Fig. 8, which shows January temperatures in Pakistan.

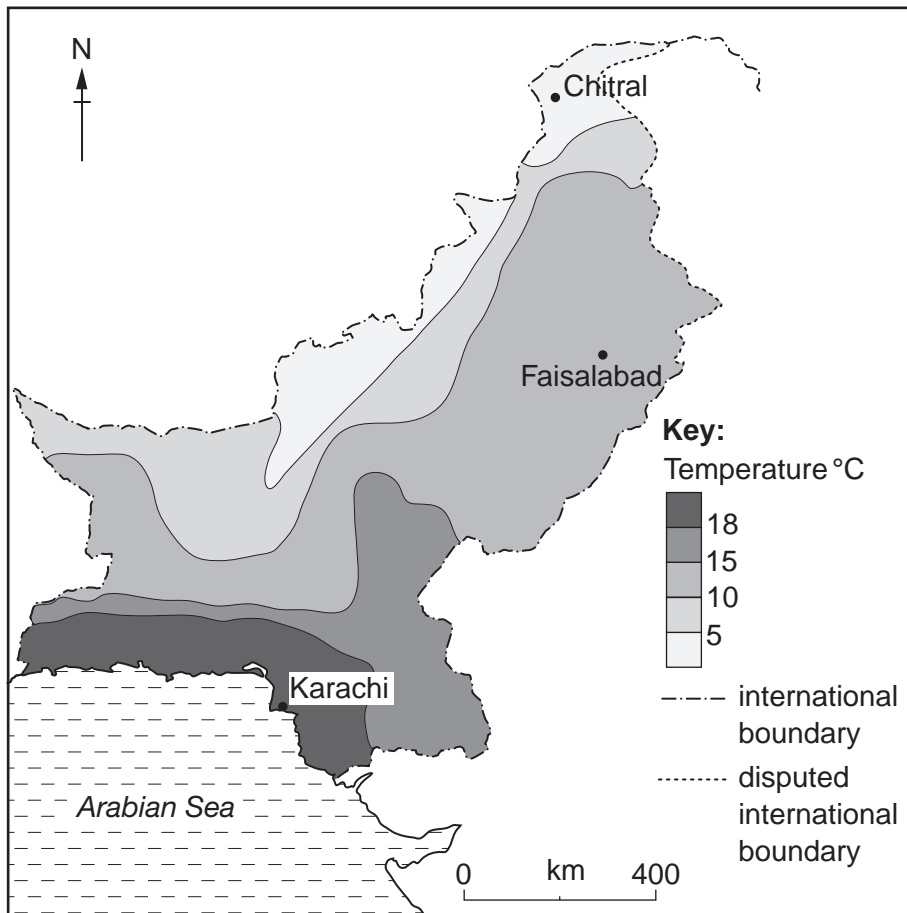


Fig. 8

(i) What is the temperature at:

Karachi? °C

Faisalabad? °C

Chitral? °C [3]

(ii) Do the temperatures increase or decrease:

from south to north?

from east to west? [2]

(iii) Explain **two** factors that affect winter temperatures in Pakistan.

1

.....

.....

.....

.....

2

.....

.....

.....

.....

..... [4]

(b) Study Fig. 9, which shows the distribution of monsoon rainfall in Pakistan.

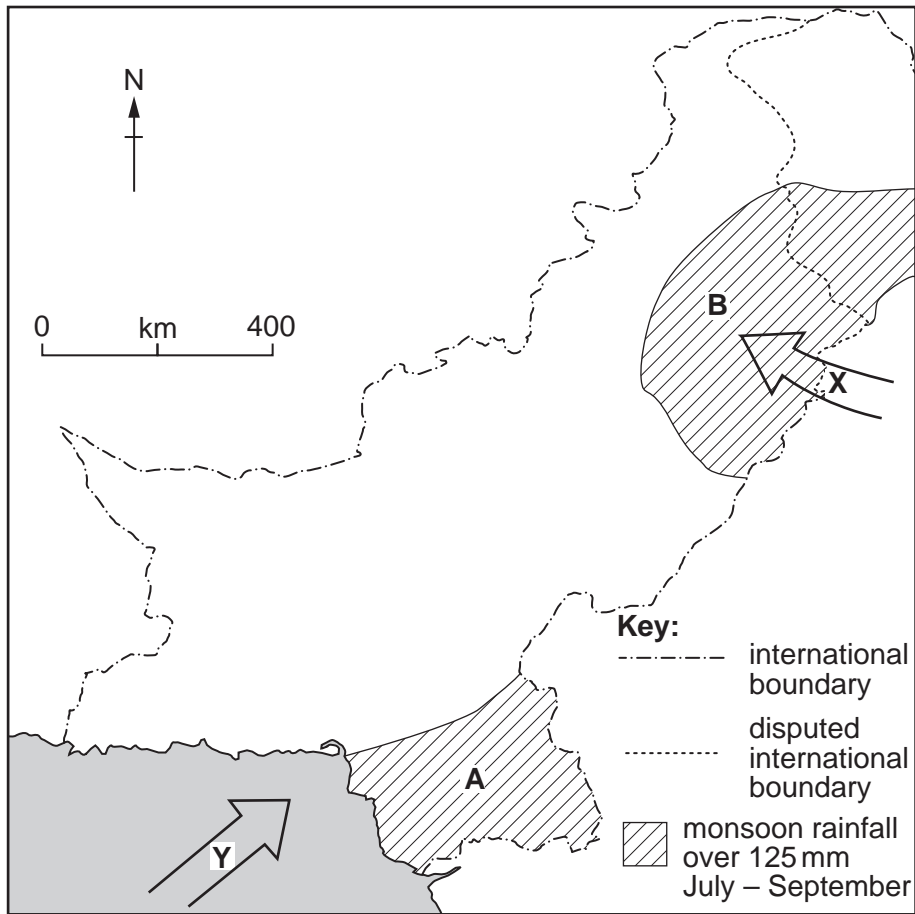


Fig. 9

Copyright Acknowledgements:

Question 2 Figure 2 © Data; Federal Bureau of Statistics, Pakistan.
Photographs A & B © Estate of Roland Strutt (c) UCLES.

Permission to reproduce items where third-party owned material protected by copyright is included has been sought and cleared where possible. Every reasonable effort has been made by the publisher (UCLES) to trace copyright holders, but if any items requiring clearance have unwittingly been included, the publisher will be pleased to make amends at the earliest possible opportunity.

University of Cambridge International Examinations is part of the Cambridge Assessment Group. Cambridge Assessment is the brand name of University of